



PRECIOUS STAR EXAM SERIES

COMPETENCY BASED CURRICULUM

GRADE ONE - YEAR 2024

MATHEMATICAL ACTIVITIES

{1}



009


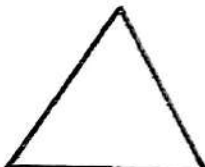
NAME: _____ SCHOOL: _____ DATE: _____



SUMMATIVE GRADING

| Exceeding Expectation 35 - 40 | Meeting Expectation 20 - 30 | Approaching Expectation 10 - 15 | Below Expectation 0 - 10 |
|----------------------------------|--------------------------------|------------------------------------|-----------------------------|
| | | | |


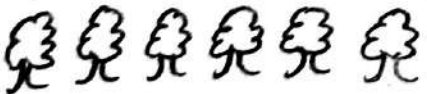
Match the shapes

1.  


2.  

3.  

Count and write

4.  ,
 = _____

5.  = _____

6.  = _____

Fill in the missing numbers

7. 2, 4, 6, _____

8. 5, 10, 15, _____

9. 20, 19, 18, 17, 16, _____

10. 7 tens 8 ones = _____

11. 6 = _____ tens _____ ones.

Write in words

12. 9 _____

13. 6 _____

14. $3 + 7 + 2 =$ _____

15. 13 16. 40

$\begin{array}{r} + 5 \\ \hline \end{array}$

$\begin{array}{r} + 50 \\ \hline \end{array}$

17. $45 + 3 =$ _____

18.
$$\begin{array}{r} 2 \\ 1 \\ + 7 \\ \hline \hline \end{array}$$

Subtract

19. $10 - 7 = \underline{\hspace{2cm}}$

20.
$$\begin{array}{r} 18 \\ - 9 \\ \hline \hline \end{array}$$

21.
$$\begin{array}{r} 70 \\ - 30 \\ \hline \hline \end{array}$$

22. $15 - 8 = \underline{\hspace{2cm}}$

23. $98 = \underline{\hspace{2cm}}$ tens $\underline{\hspace{2cm}}$ ones.

24.
$$\begin{array}{r} 53 \\ - 6 \\ \hline \hline \end{array}$$

25. $83 + \square = 85$

Write the missing number

26. 40, 50, 60, $\underline{\hspace{2cm}}$, $\underline{\hspace{2cm}}$, 90.


27. 80, 70, $\underline{\hspace{2cm}}$, 50.

Write need or want


28. A pair of shoes $\underline{\hspace{2cm}}$

29. Television $\underline{\hspace{2cm}}$

30. Draw a triangle.



Price list



banana sh. 10



pencil sh. 20



bread sh. 65



book sh. 45

31. How much is a pencil. $\underline{\hspace{2cm}}$

32. How much? $\underline{\hspace{2cm}}$
shillings.



33. Thursday, Friday, $\underline{\hspace{2cm}}$

34. Which one hold more? $\underline{\hspace{2cm}}$



cup



jug

35. Complete the pattern.





PRECIOUS STAR EXAM SERIES

COMPETENCY BASED CURRICULUM

GRADE ONE - YEAR 2024

LITERACY ACTIVITIES

{1}

NAME: _____ SCHOOL: _____ DATE: _____

SUMMATIVE GRADING

| Exceeding Expectation 20 - 25 | Meeting Expectation 15 - 20 | Approaching Expectation 10 - 15 | Below Expectation 0 - 10 |
|----------------------------------|--------------------------------|------------------------------------|-----------------------------|
| | | | |

Read the story aloud

Today, Mike and Jane are at home. Jane has a bike. Mike has a kite. They play with the bike and kite. They run to the lake. Mike is happy. Jane is happy too.



PRECIOUS STAR EXAM SERIES

COMPETENCY BASED CURRICULUM

GREDI 1 - MWAKA 2024

MAZOEZI YA KUSOMA

{1}

JINA: _____ SHULE: _____ TAREHE : _____

VIUNGO VYA KUTATHMINI

| Kuzidisha matarajio 20 - 25 | Kufikia matarajio 15 - 20 | Kukaribia matarajio 10 - 15 | Mballi na matarajio 0 - 10 |
|--------------------------------|------------------------------|--------------------------------|-------------------------------|
| | | | |

Soma hadithi kwa sauti:-

Hili ni darasa la kwanza. Katana yuko katika darasa hili. Darasani mna saa na chaki. Pia mna ubao. Darasa hili lina madawati manne. Katana hukaa kwenye dawati la kwanza.



PRECIOUS STAR EXAM SERIES

COMPETENCY BASED CURRICULUM

GRADE ONE - YEAR 2024

ENGLISH ACTIVITIES

{1}

NAME: _____ SCHOOL: _____ DATE: _____

SUMMATIVE GRADING

| Exceeding Expectation 25 - 33 | Meeting Expectation 15 - 25 | Approaching Expectation 10 - 20 | Below Expectation 0 - 10 |
|----------------------------------|--------------------------------|------------------------------------|-----------------------------|
| | | | |

Dictation


1. _____
2. _____
3. _____
4. _____
5. _____

Write their plurals


6. girl _____
7. potato _____
8. bench _____
9. box _____
10. cup _____

Name the pictures


11.



12.



13.



Use 'on' 'in' or 'under'

14. The water is _____ the jug.

15. The books are _____ the table.

16. The cat is _____ the bed.

Fill in the spaces with the correct words.

17. I have _____ eggs.

(oval, circle)

18. Mat and Tam are _____ friends. (bad, good)

19. Mary _____ the cups. (washed, wash)

20. I _____ for my pencil in the bag. (look, looked)

Write the opposite

21. girl _____

22. father _____

Write correctly

23. School big is My.

24. leader good is He a.

25. red pencil I have a.

26. The milk is _____ the glass.

Use 'my' 'our' or 'her' to fill in the spaces.

27. This is _____ book.

28. _____ chief has a shop.

29. Tam reads _____ book.

30. _____ school is big.

Read the passage and answer the questions

BEN AND TAM

Ben has a cat. It likes to play. Ben plays with his cat. Tam has a dog. It likes to play. Tam plays with her dog. Ben and Tam plays together. They shares their toys too.

31. What do Ben and Tam have?

32. What does the dog likes to do? _____

33. Which game will Ben and Tam play? _____

34. What is title of the story?

35. Tam is a _____

(boy, girl)



PRECIOUS STAR EXAM SERIES

COMPETENCY BASED CURRICULUM

GREDI YA KWANZA - MWAKA 2024

MAZOEZI YA KISWAHILI

009

{1}

JINA: _____ SHULE: _____ TAREHE: _____
VIUNGO VYA KUTATHMINI

| Kuzidisha matarajio 25 - 35 | Kufikia matarajio 20 - 25 | Kukaribia matarajio 15 - 20 | Mball na matarajio 0 - 10 |
|--------------------------------|------------------------------|--------------------------------|------------------------------|
| | | | |


Imla

1. _____
2. _____
3. _____
4. _____
5. _____


Umoja au wingi

16. mkate _____
7. dawati _____
8. kalamu _____
9. mtoto _____
10. kitabu _____

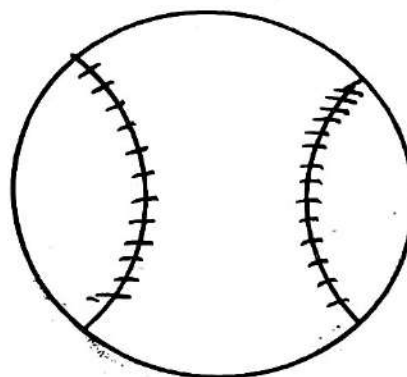
Andika majina ya picha



12.



13.



Tumia huyu au hawa

14. Kijana _____ analia.
15. Watoto _____ ni wazuri.
16. Mtu _____ ni mrefu.
17. Wasichana _____ wanafagia.

Tumia (-angu) au (-etu)

18. Chakula _____ kimeiva.
19. Basi _____ limefika.
20. Kalamu _____ zinaandika.
21. Mihogo _____ italiwa.
22. Mzazi _____ amewasili.

Chagua jibu sahihi

23. Kiti _____
(hiki, hivi)
24. Vyakula _____ vitaliwa.
(hiki, hivi)
25. _____ meno.
(sugua, chana)

Kanusha sentensi hizi.

26. Mimi ninasoma.

27. Mimi ninachora.

28. Sisi tutasoma vitabu.

Uda maneno

29. d _____
30. ny _____

Soma hadithi kisha ujibu

maswali

Abu na Kalulu ni marafiki. Wako katika darasa la kwanza katika shule ya msingi ya Heshima. Kila Jumamosi wao hupenda kulala chini ya mti. Siku moja siafu waliwauma sana. Hawakuwahi kulala chini ya mti tena.

31. Abu na Kalulu wako darasa gani? _____
32. Shule yao inaitwaje?

33. Ni waduu gani waliwauma? _____
34. Walipenda kufanya nini pamoja.

35. Marafiki huwa wana

(chukiana, pendana)



PRECIOUS STAR EXAM SERIES

COMPETENCY BASED CURRICULUM

GRADE ONE - YEAR 2024

009

CREATIVE ART

{1}

NAME: _____ SCHOOL: _____ DATE: _____

SUMMATIVE GRADING

| Exceeding Expectation 20 - 25 | Meeting Expectation 15 - 25 | Approaching Expectation 10 - 20 | Below Expectation 0 - 10 |
|----------------------------------|--------------------------------|------------------------------------|-----------------------------|
| | | | |

ART & CRAFT

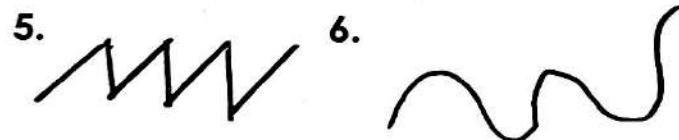
1. Loud sounds can hurt our _____
(legs, eyes, ears)

Name 3 materials we use while drawing

2. _____
3. _____
4. _____

(rubber, water, pencil, paper)

Name the following lines



(straight, wavy, zigzag, spiral)

8. We can create rhythm by clapping our _____
(hands, legs)

9. We nod our _____ to create rhythm.
(heads, hands)

10. We stamp our _____



(leg, feet)

11. We can stretch our _____ while seated.



(neck, shoulders)

12. Stretching relaxes our body _____
(nails, muscles, sweat)

13. We can also stretch our _____ while seated.

(hands, eyes)

14. We can jump for _____ and (15) _____
(fast height, distance)

16. We can use a _____ to jump for height. (rope, broom)

17. We can make a rope using _____ and (18) _____

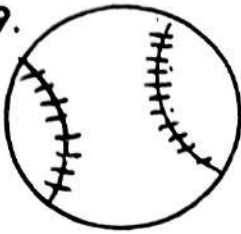
(papers, sisal fibre, old pieces of clothes)

18. Colouring pictures make them more _____

(small, beautiful)

Name these items

19.



20.



21. Plants can be painted using colour _____

(green, blue)

22. We use a _____ for painting pictures.

(pencil, paint brush)

23. We can sing songs by _____

(humming, jumping)

24. Playing and singing at the same time is called _____ games.

(playing, singing)

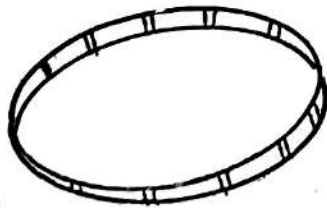

25. When singing we wear _____

(costumes, clothes)


Name the pictures

26.

27.



28.



(doll, skipping rope, hula hoop)

29. We can throw and catch a _____

(stone, water, ball)

30. We can use _____ (31) _____ to make balls.

(old clothes, waste papers, sand)

While doing log roll we can roll in different ways.

32. _____ 33. _____

34. Name any balance that you know _____

(log roll, T. balance)



35. We can use _____ papers to make markers. (coloured, wet)

Name 2 objects that can float on water.

36. _____ 37. _____

Draw and colour (4mks)

38. drum 39. shaker





PRECIOUS STAR EXAM SERIES

COMPETENCY BASED CURRICULUM

GRADE ONE - YEAR 2024

ENVIRONMENTAL & RELIGIOUS

{1}

009

NAME: _____ SCHOOL: _____ DATE: _____

1. We buy things in the _____

(school, market, road)

2. Two people who are found in
the market are _____

(3.) _____

(father, mother, seller, buyer)

4. Fruits sold in the market can
be _____ (5.)

6. We can see the _____ during
the day.

(sun, moon, stars)

7. Clear sky is _____ in colour,
(blue, yellow)

8. We see _____ during the day.

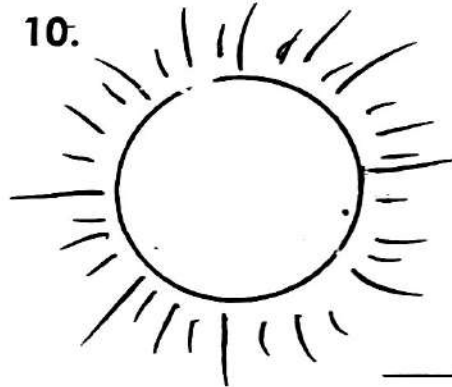


9. The best day we can fly a kite
is when the weather is _____

(rainy, windy)

Name the weather symbols

10.



11.



12.



13. We should wash our _____
after playing with soil.

(hands, legs)

Match the sound with their meaning

Sound alert

Meaning

14. police siren sick person

15. screaming danger.

16. ambulance thieves

17. _____ ring to produce sound

(cat, bell)

18. We _____ a drum to produce
sound.

(hit, pluck, blow)

19. Loud sounds can _____ our
ears.

(make, hurt)

20. We can shake a _____ to
make sound.

(shaker, drum)

21. _____ and (22.)
_____ are source of
water.

23. Always _____ the tap after use.

(close, open)

24. We can use water for _____
and (25.) _____

26. _____ are animals found at
home.

(wild, domestic)

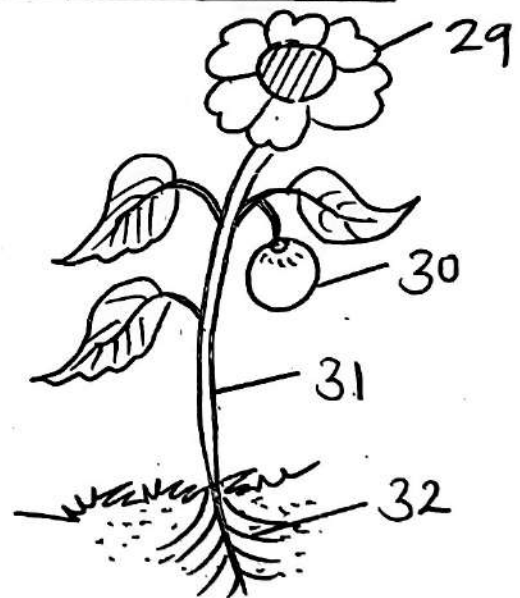
27. A _____ can be found at home.

(lion, snake, cat)

28. We can care for plants
by _____ them.

(uprooting, watering)

Name parts of the plant



29. _____

30. _____

31. _____

32. _____

33. Plants give us _____

(brooms, food)

34. We can care for animals
by _____ and

(35) _____.

C. R. E ACTIVITIES

36. The mother of Jesus was _____

(Mary, Hannah, Jane)

37. God knows me by my _____

(name, school, mother)

38. Jesus was born in _____

(Nazareth, Bethlehem)

39. Jesus _____ his parent.

(obeyed, abused, hated)

40. Jesus changed water into _____

(milk, wine, porridge)

41. Elisha had a friend called _____

(John, Peter, Elijah)

42. Jesus was baptized in a

river _____

(Jordan, Nairobi, Mathare)

43. The _____ is a holy place.

(school, church, home)

44. Songs sung during christmas
are called _____

(music, carols)

45. God helped _____ to kill Goliath.

(David, Samson)

46. When given something we
should say _____

(ok, thank you, welcome)

47. We can share _____ at home.

(toothbrush, desk,

television)


48. _____ want us to tell the truth.

(God, satan)

49. We should _____ in church.

(pray, play, run)

50. Draw and colour a church



I. R. E ACTIVITIES

Write down the number or rakaats

36. Fajr _____ (3, 2)


37. Dhuhr _____ (4 5)

38. Ajr _____ (3,4)


39. Maghrib _____ (4, 2)

Draw the following creations
of Allah


40. cat




41. tree



42. sun



43. COW



44. Before doing anything, Muslims
should say _____

(Bismillah, Alhamdulillah)

45. We give _____ to the poor.

(Zakat, Salat)

46. _____ leads the prayer.

(Imam, parent)

47. Allah gave me _____ to walk.

(sticks, legs)

48. Those who are _____
enter paradise.

49. We face _____ when praying.

(Mosque, Qibla)

50. Prophet Adam was created
on _____

(Sunday, Friday)